


How Many?


Help Maisie Jones find the fossils. How many can you count?

Key:

- Ammonite shell fossil 
- Dinosaur skeleton 
- Trilobite fossil 


Answers:

- Ammonite shell fossil – 5
- Dinosaur skeleton – 1
- Trilobite fossil – 3




Help Maisie catch the fossil thief!

Can you find out which colourful line will lead Maisie to the thief?



Answers:
Line C



MACMILLAN
Children's Books

Maisie Jones and the Dinosaur Bones © Lily Murray and Jenny Lovlie, 2024 – Macmillan Children's Books